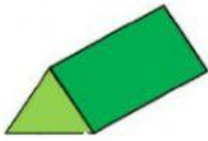


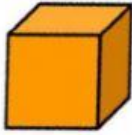
Name: _____

1.

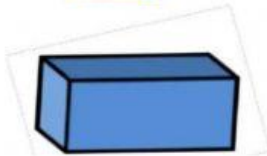
Match with the name of prisms



square prism



rectangular prism



triangular prism

2.

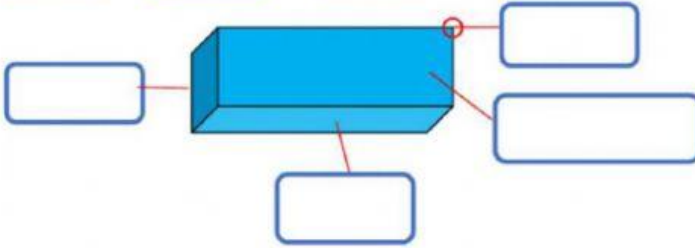
Fill in the blanks

vertex

edge

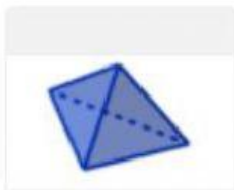
base

flat surface



3. The point where two edges on a polygon or polyhedron meet
vertex line side

4. A cylinder is an example of a non-polyhedron
True False



Q5. What is the name of this 3D shape ?

cube


cuboid

tetrahedron

prism

6. A solid having four plane triangular faces; a triangular pyramid.
Tetrahedron sphere cube

7.



How many **vertices** on a **tetrahedron**
(triangular-based pyramid)...

4

5

6

3