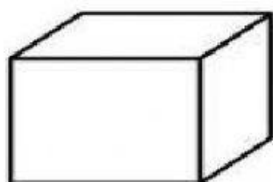


Write the number of faces, edges, and vertices

--

Name: _____


3D Solid Detective



Faces: _____

Edges: _____

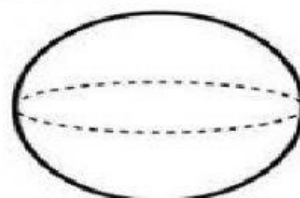
Vertices: _____



Faces: _____

Edges: _____

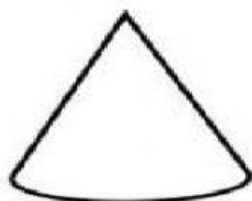
Vertices: _____



Faces: _____

Edges: _____


Vertices: _____



Faces: _____

Edges: _____

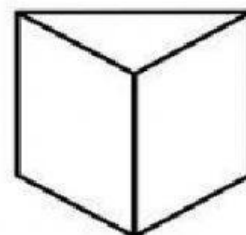
Vertices: _____



Faces: _____

Edges: _____

Vertices: _____



Faces: _____

Edges: _____

Vertices: _____