








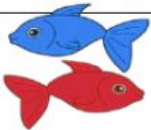


Name: \_\_\_\_\_

## Counting On to 10 **Under the Sea**

Say the number. Then, count the objects on to find the sum. Write the sum in the box provided.

1.	3 +		=	<input type="text"/>
2.	5 +		=	<input type="text"/>
3.	8 +		=	<input type="text"/>
4.	7 +		=	<input type="text"/>
5.	4 +		=	<input type="text"/>
6.	6 +		=	<input type="text"/>
7.	2 +		=	<input type="text"/>
8.	9 +		=	<input type="text"/>
9.	5 +		=	<input type="text"/>

10.	$7 + $  $ = $ <input type="text"/>
-----	---