


## Food Chain and Food Web


--

Drag the pictures in the correct space to show the order of the food chain.

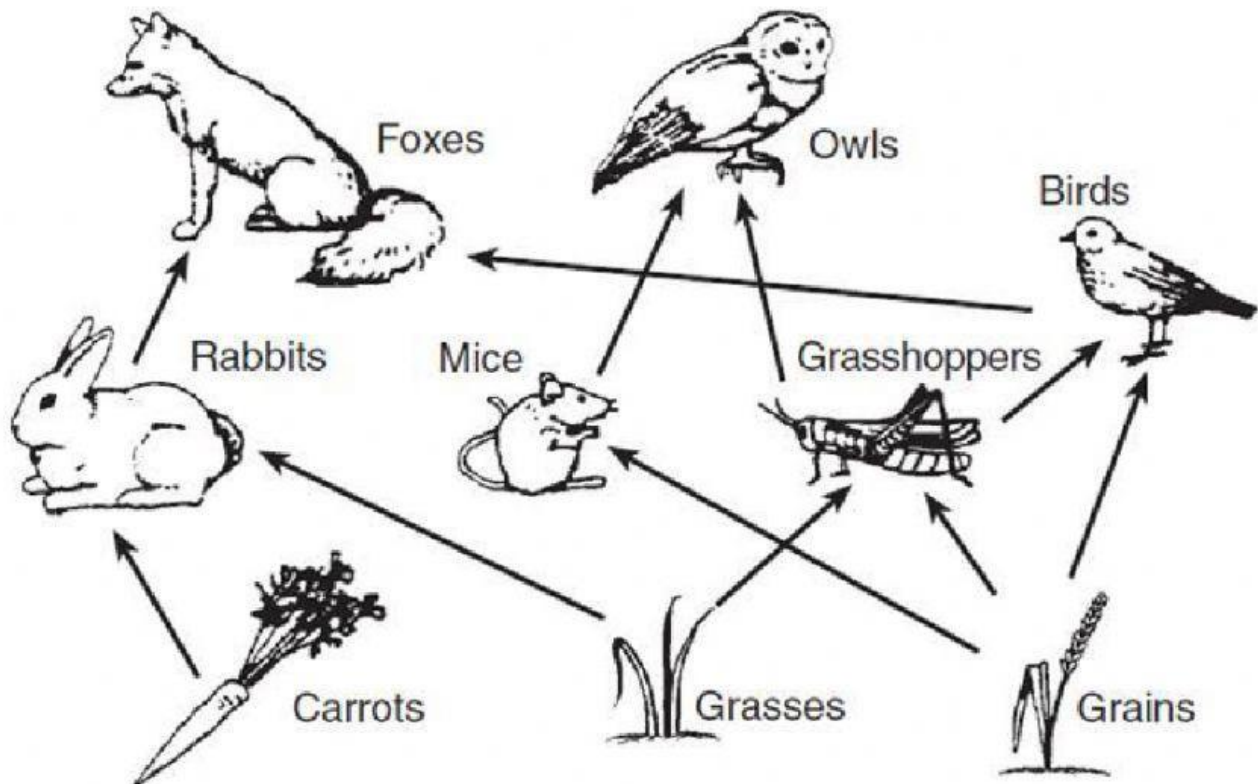
--	--	--	--	--



--	--	--	--	--



Look at the picture then answer the questions below.



(Not drawn to scale)

Name two producers in the food web.

\_\_\_\_\_

Name two consumers in the food web. \_\_\_\_\_

Name the animals that eat the grasshopper. \_\_\_\_\_

Name the animals that fox eats \_\_\_\_\_

Name the animals that eat the grain.

\_\_\_\_\_