




**KV AFS BAGDOGRA**

**ACTIVITY SHEET JANUARY(2020-21)**

**SUB – MATHS**

**CLASS 2**

1) See the table below and answer:

Number of Glasses	No of children
	23
	42
	24

Fill in the blanks:

a) The number of children who drink 3 glasses of water is -----.

b) 5 glasses of water is drunk by ----- children.

c) 4 glasses of water is drunk by ----- children.

d) Total glasses = \_\_\_\_\_

2) Rinko sold 28 bags on the first day and 12 bags on the second day. How many bags did she sell in all?

a) 40

b) 42

3) Bunny ate 14 bananas and Funny ate 18 bananas. Who ate more bananas?

a) Funny

b) Bunny

