






Not A Triangle

Explain why each shape in the table is NOT a triangle.

Shape	This shape is not a triangle because...
Example: 	the sides are not closed.
1 	
2 	
3 	
4 	

Which statement about triangles is correct?

- A. Triangles have 4 sides
- B. Triangles must have a 90 degree angle
- C. Triangles have 3 vertices
- D. Triangles must have 3 equal sides