

Name

Date

Entry 2 Target Check activities

1. Name the shape and write their properties



2. What shape are these objects? Tick the right angles.



3. Complete these multiplication sentences.

Double two =

$10 \times 5.2 =$

Half 25 =

$100 \times 19.62 =$

4. Luka buys some cereal. He says it has the same properties as a square- is he right?



5. Sally is wearing a party hat. What shape is the base?



6. Hassan uses a paper plate.
Complete the sentence
It has side/sides.



7. Work out these calculations- (show your working out)

23 cm in mm 10 =

540 cm in m =

12 km in m =

8. Samira goes to a coffee shop. She chooses the **widest** seat.

- i) Tick the one she chooses.
- ii) The **highest** seat is on the **left/right** of Samira's seat.






- iii) She chooses the **lowest** with the **shortest** legs. Tick the table she chooses.



- iv) Afrah buys a TV. She chooses the **widest** TV. Tick the one she chooses.

		
78 cm W, 47cm H, 9cm D	94 cm W, 37 cm H ,11 cm D	653 mm w, 495 mm h , 92mm d

- v) She chooses a box 12 cm wider than her TV. Tick the one she chooses.

		
1.06m W, 0.5m H, 0.25m D	0.5 m h, 0.1 m d, 0.8m w	60 cm H, 90cm W, 15 cm D

--	--	--

Rounding

How big is this box to the nearest metre?

0.5 m h _____

1.3 m d _____

1.8m w _____

