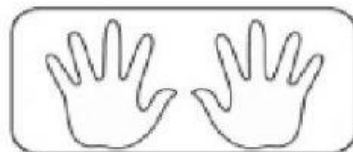
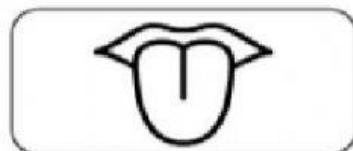


SEKOLAH KEBANGSAAN JELAPANG
SCIENCE YEAR 2
1.1 SCIENCE PROCESS SKILLS
1.1.1 OBSERVING

Name	
Class	2 Delima

A) Match the following senses correctly.



Sense of sight

Sense of hearing

Sense of touch

Sense of smell

Sense of taste

B) Drag and the drop the answer provided in the correct picture.

Sense of sight

Sense of touch

Sense of smell

Sense of hearing

Sense of taste

1.



2.



3.




4.



5.



C) Make an observation on the fruit below. Rewrite the answer in the space provided.



Hard and smooth

Sweet

No sound

Has smell

Red colour

Sense	Observation
Sight	
Smell	
Taste	
Touch	
Hearing	