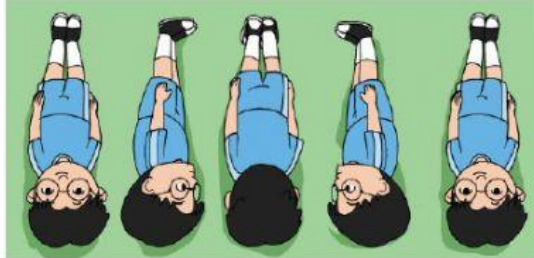


Nama Peserta Didik :

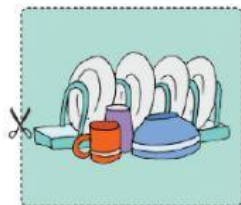
LK T6 ST1 PB2

Nomor Absen :


1. Udin sedang melakukan gerakan _____ di atas matras.




2. Susunlah gambar berikut secara berurutan dengan cara dipindahkan.




1



2



3



4

