



Colegio Nourish

2020-2021

January Exam






2nd Grade

Math

Name: _____ List # _____

Date: _____ Teacher: Jacklenis Salazar

I. Drag the name to the box of each coin and write the value on the line. (1-10)


nickel	dime	penny	quarter	Half dollar
				
_____ ¢	_____ ¢	_____ ¢	_____ ¢	_____ ¢

II. Solve the problem.

11. Mary had 10 cents in her piggybank. She finds 25 cents more and puts it in her bank. Then Mary's dad gives her 50 cents to put in her bank. How many cents does Mary have in her bank now?

- a) 75 ¢ b) 85 ¢

III. Order the coins and count on to find the total value. (12-15)

		
_____ ¢	_____ ¢	_____ ¢

Total _____ ¢

IV. Find the coin with the greatest value. (16)



V. Solve the problem.

17. Mike has these dollar bills. What is the total value?



- a) \$ 8 b) \$ 18 c) \$16

VII. Choose the correct hour according to each clock. (20-22)



- a) 2:00 o'clock b) 2:06 c) 2:30



- a) 12:05 b) 3:00 o'clock c) 3:15



a) 5:45

b) 6:09

c) 9:30



a) 4:15

b) 4:20

c) 4:00



a) 2:30

b) 7:20

c) 7:10

VIII. Circle AM or PM to tell when you would do each activity. (23-25)

23. Do your homework.

a) 4:00 A.M. b) 4:00 P.M.

24. Eat breakfast.

a) 10:00 A.M. b) 10 P.M.

25. Wake up.

a) 7:00 A.M. b) 7:00 P.M.