









Mathematics

Tally Marks Application

Use the table to answer the questions below.

Colours	Tally Marks
	
	
	
	

1. How many students like yellow?
2. How many students like black?
3. How many students like blue?
4. How many students like red?
5. Which colour do the students like least?
6. Which colour do the students like the most?
7. How many students like blue and red?