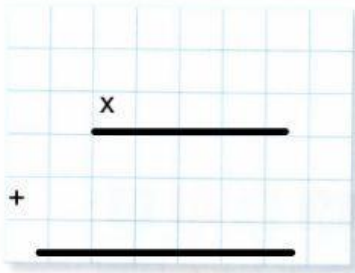


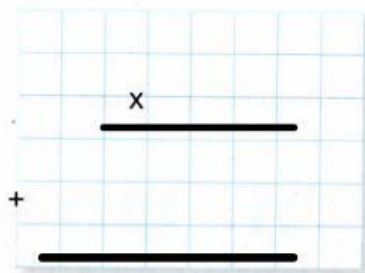
## Bi zifrarekin biderkatu

1 Jarri bertikalean eta biderkatu.

$$937 \times 46$$



$$1832 \times 15$$



### Gogoan izan

|   |    |   |   |   |   |
|---|----|---|---|---|---|
|   | HM | M | E | H | U |
|   |    | 4 | 1 | 2 | 5 |
|   |    |   | × | 2 | 3 |
|   | 1  | 2 | 3 | 7 | 5 |
| × | 8  | 2 | 5 | 0 |   |
|   | 9  | 4 | 8 | 7 | 5 |

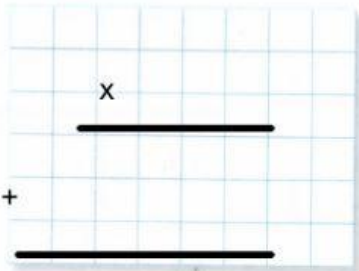
2 Idatzi honako biderketa hauek zuzenak izateko falta diren zifrak.

|   |   |   |   |   |   |
|---|---|---|---|---|---|
|   |   | 9 | 7 | 2 | 4 |
|   |   |   | × | 1 | 7 |
|   |   |   | 8 |   | 6 |
| + | 9 |   |   |   |   |
|   |   |   | 3 |   | 8 |

|   |   |   |   |   |   |
|---|---|---|---|---|---|
|   |   |   | 4 |   |   |
|   |   |   | × | 4 | 2 |
|   |   | 4 |   | 3 | 8 |
| + |   | 8 | 7 |   |   |
|   | 0 |   | 6 | 9 |   |

|   |   |   |   |   |   |
|---|---|---|---|---|---|
|   |   |   |   |   | 7 |
|   |   |   | × | 6 |   |
|   |   | 3 | 7 | 7 | 1 |
| + | 7 |   |   |   |   |
|   |   | 9 |   | 9 |   |

3 Lau eguneko safaria 216 € kostatuko zaio ikasle bakoitzari. Keparen ikasgelan 24 neska-mutil badaude, eta safarira denek joateko asmoa badute, zenbat kostatuko da txangoa guztira?



.....

.....

