

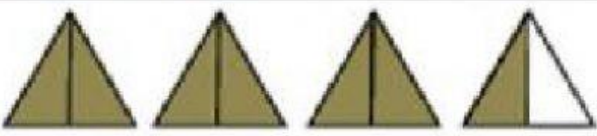

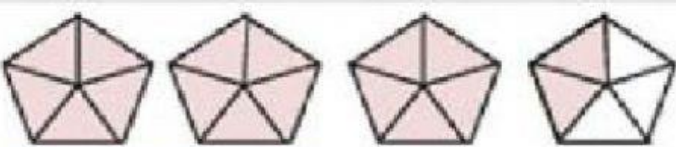




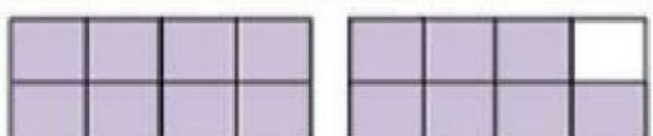
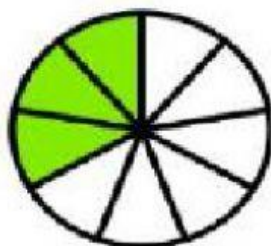




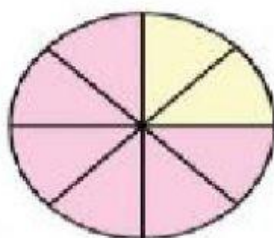
השבר בציור	השבר	מספר מעורב
1) 	$\frac{10}{3}$	$3\frac{1}{3}$
2) 	<div><div></div><div></div></div>	<div><div></div><div></div></div>
3) 	<div><div></div><div></div></div>	<div><div></div><div></div></div>
4) 	<div><div></div><div></div></div>	<div><div></div><div></div></div>
5) 	<div><div></div><div></div></div>	<div><div></div><div></div></div>
6) 	<div><div></div><div></div></div>	<div><div></div><div></div></div>
7) 	<div><div></div><div></div></div>	<div><div></div><div></div></div>
8) 	<div><div></div><div></div></div>	<div><div></div><div></div></div>
9) 	<div><div></div><div></div></div>	<div><div></div><div></div></div>
10) 	<div><div></div><div></div></div>	<div><div></div><div></div></div>



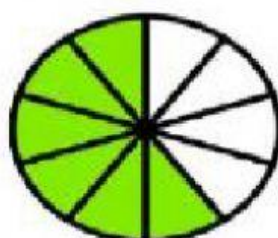
1. $\frac{\square}{\square}$



2. $\frac{\square}{\square}$



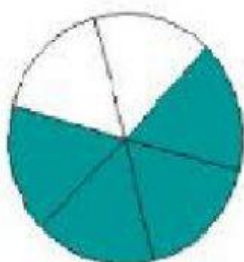
3. $\frac{\square}{\square}$



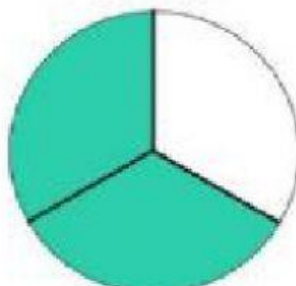
4. $\frac{\square}{\square}$



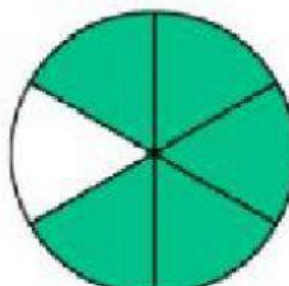
5. $\frac{\square}{\square}$



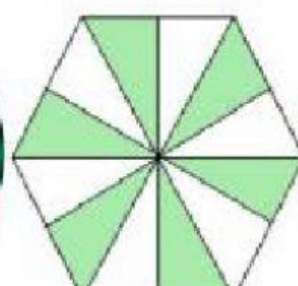
6. $\frac{\square}{\square}$



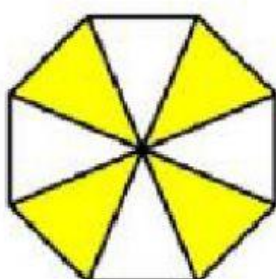
7. $\frac{\square}{\square}$



8. $\frac{\square}{\square}$



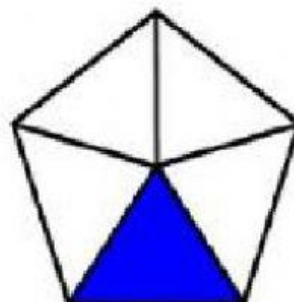
9. $\frac{\square}{\square}$



10. $\frac{\square}{\square}$



11. $\frac{\square}{\square}$



12. $\frac{\square}{\square}$

