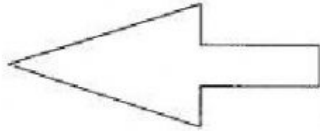


# Worksheet

1. How many lines of symmetry are there in a rectangle?

- (a) 1
- (b) 2
- (c) 3
- (d) 4

2. How many lines of symmetry are there in the following figure?




- (a) 1
- (b) 2
- (c) 3
- (d) 4

3. How many lines of symmetry are there in an isosceles triangle?

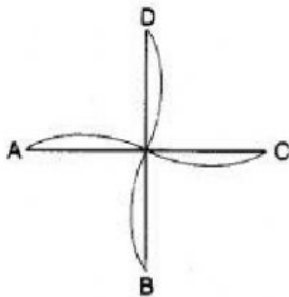
- (a) 4
- (b) 3
- (c) 1
- (d) 2

4. How many lines of symmetry are there in the following figure?



- (a) 2
- (b) 1
- (c) 4
- (d) 3

5. What is the order of the rotational symmetry of the following figure?



- (a) 4
- (b) 3
- (c) 2
- (d) 1