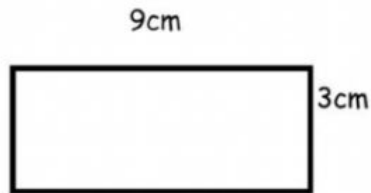
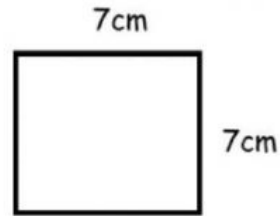


Name: _____

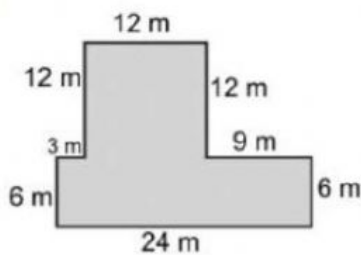
Calculate the perimeter of the following rectangles and squares.



Perimeter=



Perimeter=



Perimeter:

A rectangle has a length of 5 cm and a width of 2 cm.
Calculate its perimeter.

The perimeter of a square book is 40cm. What will be the length of one side?