

Cada billete de 10 euros es 1 decena.

Cada moneda de 1 euro es 1 unidad.

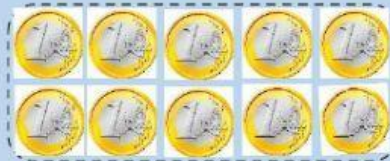
Cuenta la cantidad de euros que hay en cada caso.  
Escribe el número de decenas y de unidades y el total de euros.



decenas  unidades =  euros

---


---



decena  unidades =  euros

---

---



decenas  unidades =  euros


---

---



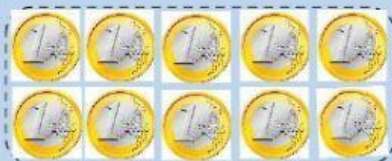
decenas  unidades =  euros

---



decenas  unidades =  euros

---




decena  unidades =  euros


---




decenas  unidades =  euros



decenas  unidades =  euros




decenas  unidades =  euros



decenas  unidades =  euros

---

---



decenas  unidades =  euros

---

---



decenas  unidades =  euros

---

---

