







Teacher Maria asked her students which fruit they liked the most. The pictures below show the fruits they preferred. Use the information to complete the table and answer the questions.



1) Complete the data table

4				
				
strawberry	cherries	banana	pear	watermelon

- 2) How many students liked the cherries the best? \_\_\_\_\_
- 3) How many preferred bananas? \_\_\_\_\_
- 4) How many students liked the pear and the watermelon the most?  
\_\_\_\_\_
- 5) How many many more students preferred the strawberry over the pear?  
\_\_\_\_\_
- 6) How many students answered teacher Maria altogether? \_\_\_\_\_