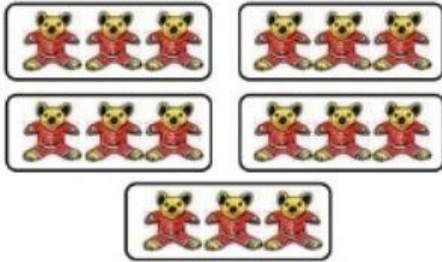


Name -

**How many groups?**

1. Dharmendra has 15 toys. He wants to keep them in boxes. If he puts 3 toys in each box, how many boxes are needed?

There are **15** toysThere are **3** toys in each boxSo, **5** boxes are needed.

If Dharmendra puts 5 toys in each box, how many boxes are needed?




There are \_\_\_\_ toys

There are \_\_\_\_ toys in each box

So, \_\_\_\_ boxes are needed.

2. Radha has 24 flowers. She gives 6 flowers to each of her friends. Then to how many friends does she give?




There are \_\_\_\_ flowers

Flowers given to each friend \_\_\_\_

So, the number of friends she gives flowers is \_\_\_\_

If Radha gives 4 flowers to each of her friends, then to how many friends does she give?



There are \_\_\_\_ flowers

Flowers given to each friend \_\_\_\_

So, the number of friends she gives flowers is \_\_\_\_