

# LEMBAR KERJA MATEMATIKA


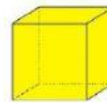
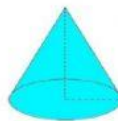
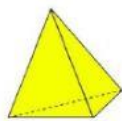
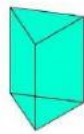
NAMA :

TANGGAL :

KELAS :

A. SIMAK VIDEO BERIKUT !

B. Letakkan gambar berikut pada kotak yang benar !



LIMAS

TABUNG

KERUCUT

PRISMA

KUBUS

C. Dengarkan lalu pilih gambar yang tepat !
