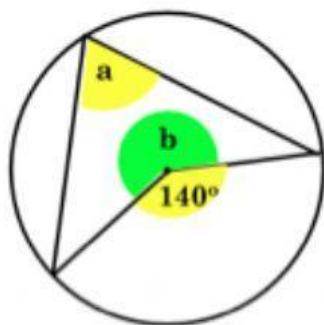


Name: _____ Date: _____

Write down the size of the angles that are marked with a letter.

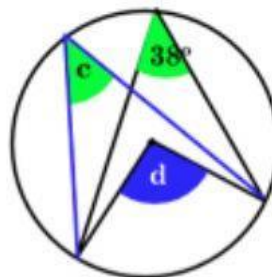
1.



$$a = \boxed{}^\circ$$

$$b = \boxed{}^\circ$$

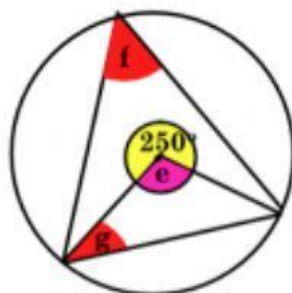
2.



$$c = \boxed{}^\circ$$

$$d = \boxed{}^\circ$$

3.

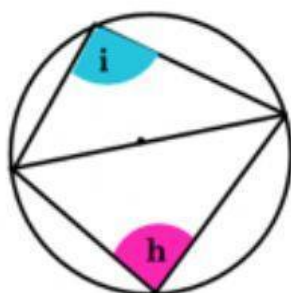


$$e = \boxed{}^\circ$$

$$f = \boxed{}^\circ$$

$$g = \boxed{}^\circ$$

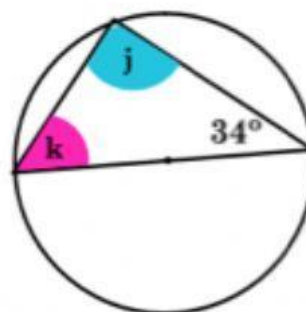
4.



$$h = \boxed{}^\circ$$

$$i = \boxed{}^\circ$$

5.



$$j = \boxed{}^\circ$$

$$k = \boxed{}^\circ$$