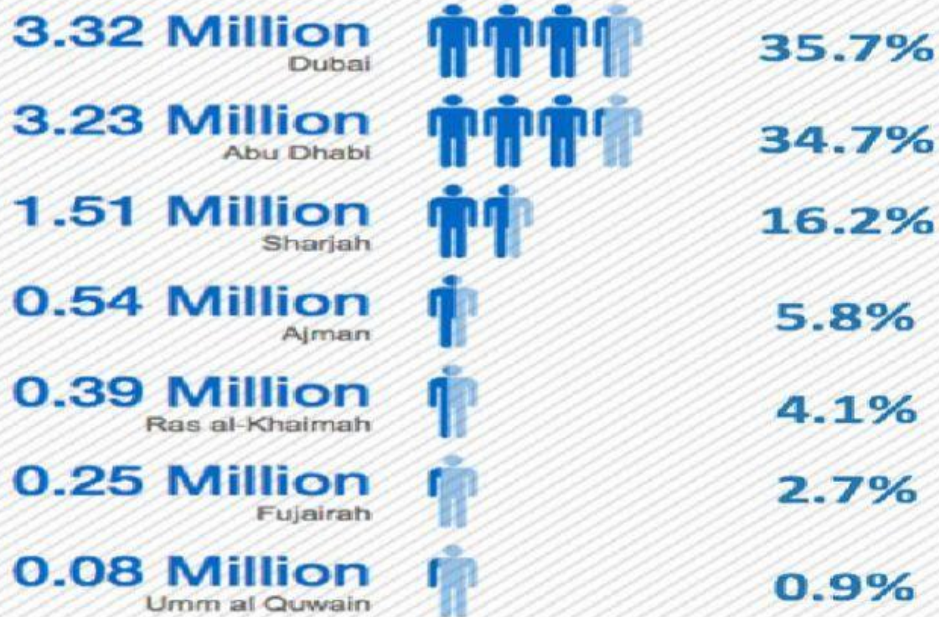
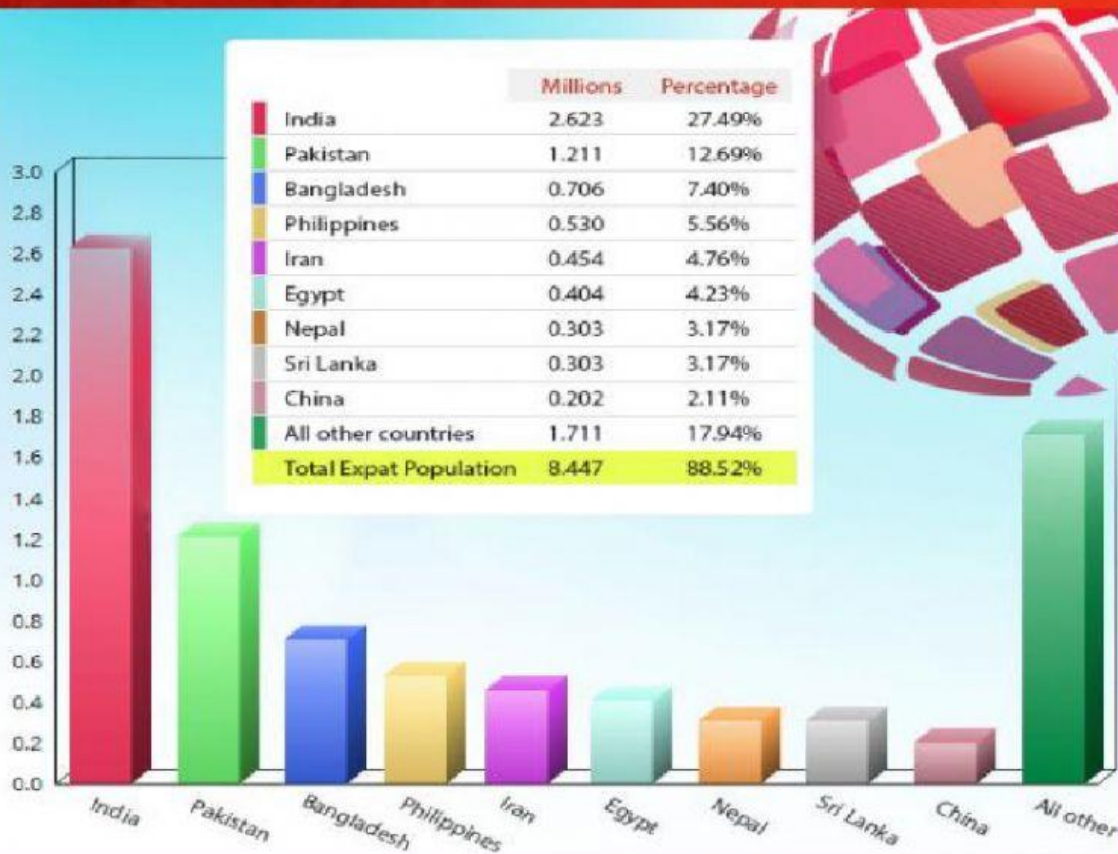


Academic Writing- 11 General – Unit 4 – Lesson 3 & 4

UAE POPULATION BY EMIRATES



EXPAT POPULATION IN THE UAE



Unit 4: Society and Community

Lesson 3: Explore

Speaking

1 Look at the chart and discuss the questions.


1 What is the chart showing?

2 How is the information organised?

bar chart line graph
numbers lists images

3 What do the numbers mean?

UAE POPULATION BY EMIRATES



Writing PCM 3

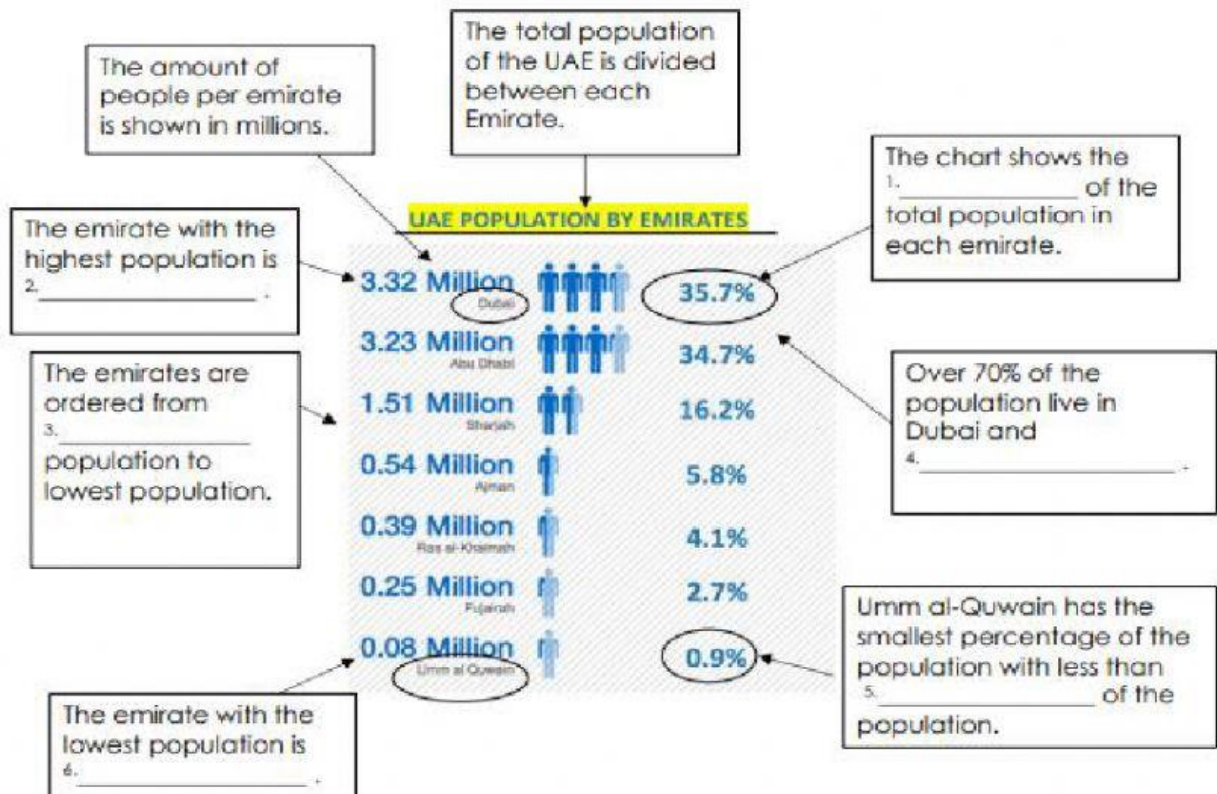
2 Use the information in the chart to complete the annotations.



Writing Tip

Annotations help to highlight and remember key information. This helps us know what to include in an essay.

highest Umm al Quwain 1% Dubai percentage Abu Dhabi



Writing PCM 3

- 3 Use the information in the chart to complete the text.

Vocabulary

populous – having a large population

Dubai is more populous than Ajman.

The UAE population by emirates

The population of the UAE is over 9 million people. We will look at how the population is distributed across the seven emirates.

Over 70% of the population of the UAE live in two emirates, Abu Dhabi and ¹_____. Dubai has a population of 3.2 million people. Abu Dhabi's population is only slightly less at ²_____ million people.

The next most populous emirate is ³_____ with 1.51 million people. This is ⁴_____ of the UAE's population. This means almost 87% of the population live in either Dubai, Abu Dhabi or Sharjah.

The rest of the population is distributed across the four remaining emirates. Ajman, Ras al-Khaimah and Fujairah each contain between 2.7% – 5.8% of the population.

⁵_____ has the smallest population at 0.08 million people. This is less than 1% of the population of the UAE.

To conclude, the population of the UAE is not distributed evenly across the seven emirates. The population living in each emirate varies significantly.

Writing

- 4 Read the text in Activity 3 and answer the questions.
- a What is the purpose of the first paragraph is to ...
a introduce the topic b talk about the UAE c make a conclusion
- b The second paragraph discusses ...
a Ras al-Kaimah b a conclusion c the most populous emirates
- c The fourth paragraph discusses ...
a Sharjah b the least populous emirates c a conclusion

Writing PCM 4

- 5 Read the information in the chart and annotate it.

PCM 4

Scan the QR Code to read the chart.



Unit 4: Society and Community

Lesson 4: Produce

Writing

- 1 Use the information in your annotated chart to write about the expat population in the UAE.

Introduction

The expat population in the UAE is _____

Countries that most expats are from

Over 27% of the expat population are from _____

Countries that least expats are from

China has the 9th largest number of expats living in the UAE _____

Conclusion

In conclusion _____
