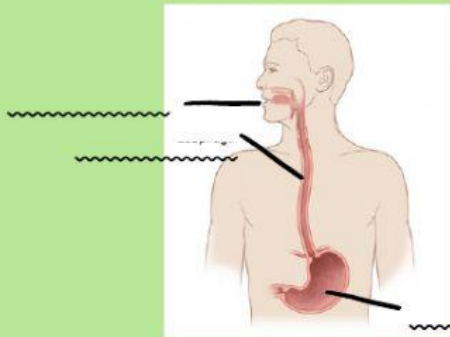
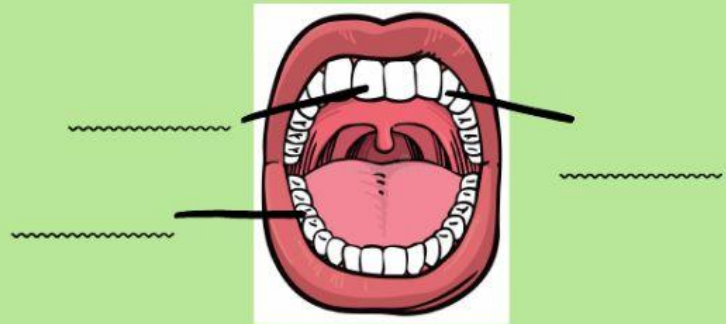


Digestive System

1. Label the diagram. Write the main parts of the digestive system




Digestive System



Mouth (milk teeth)

! Words: incisor - oesophagus - mouth - molar - canine - stomach

2. Put the sentences in order:



The food is digested in your stomach You chew the food with your teeth Food goes into your mouth The food you don't need is expelled out of your body in your faeces The food goes down your oesophagus and into your stomach

3. True or false?

You don't need to eat every day, so your body has energy

You need to eat every day, so your body has energy

You don't need to chew your food well so it goes down your oesophagus easily

You chew your food in the nose

The food goes down the stomach into the oesophagus

The food goes down the oesophagus into the stomach