

Q1.

$39 \div 3 =$

Q2.

$235 - 20 =$

Q3.

$344 + 528 =$

Q4.



$14 + 15 + 16 =$

Q5.

$9 \times 22 =$


Q6.

Choose the clock face that shows **ten past twelve**.



Q7.

There are **4 fewer** boys than girls in Mr Hill's class. There are **18** girls.

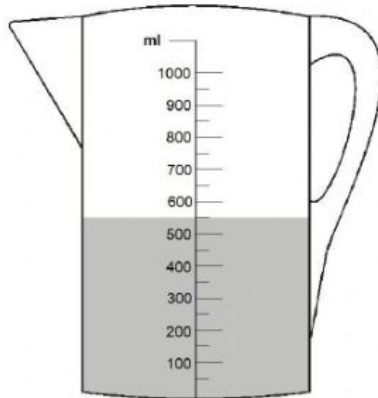


(a) How many boys are there in Mr Hill's class?

(b) How many children are there in Mr Hill's class altogether?

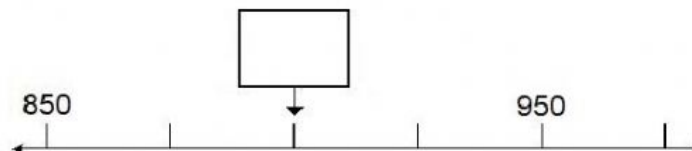
Q8.

How many millilitres (ml) of water are in the jug?

 millilitres

Q9.

Which number is the arrow (↓) pointing to? Write it in the box.



Q10.

404 460 606 640 604 406

Write these numbers in order in the boxes.