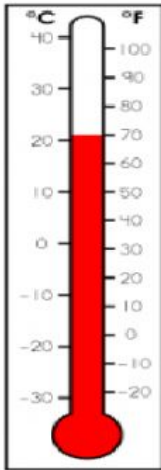



Name: \_\_\_\_\_

### Math Quiz

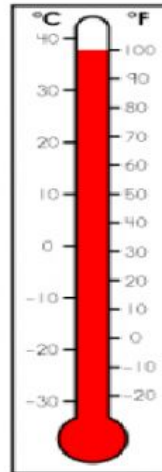
A. Look at each thermometer and record the temperature using the Fahrenheit scale.




1. \_\_\_\_\_°F



2. \_\_\_\_\_°F

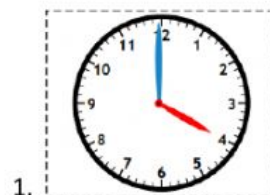


3. \_\_\_\_\_°F



4. \_\_\_\_\_°F

B. Look at each clock and write the time to the hour.



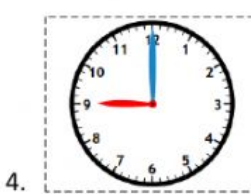
1. \_\_\_\_\_



2. \_\_\_\_\_



3. \_\_\_\_\_



4. \_\_\_\_\_