
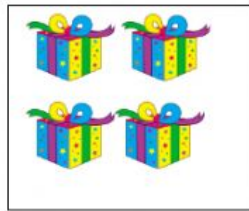


Mathematics Weekly Tests

1. Count and write the number of objects in the boxes.



2. Look at the fruit basket. Count and write the number of fruits in words.

a.tomatoes

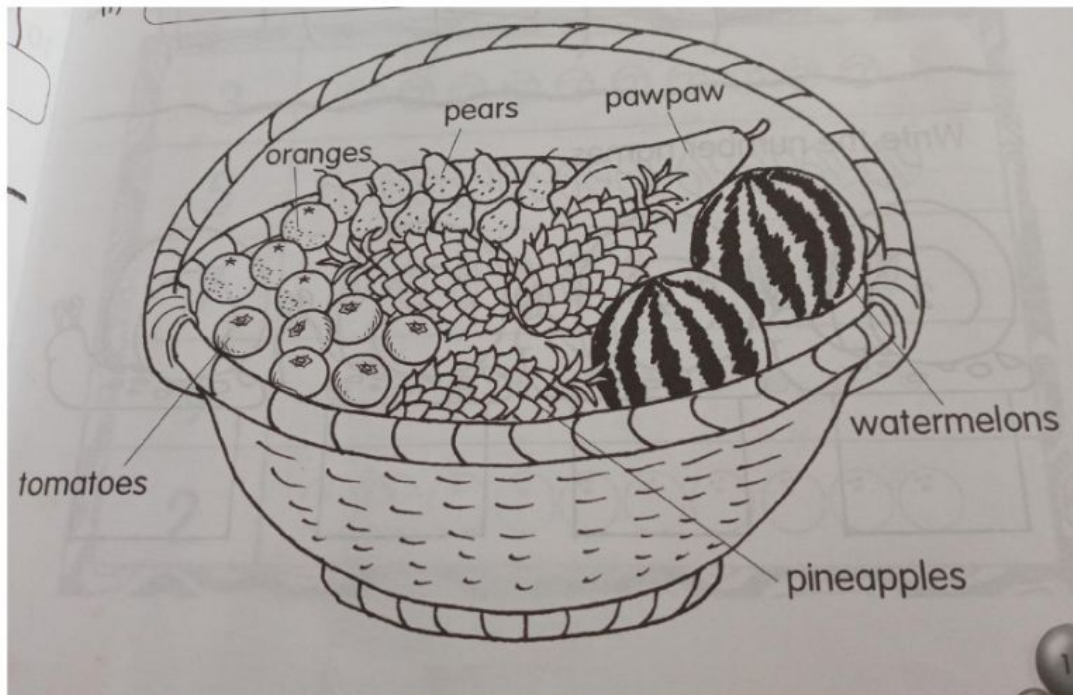
b.oranges

c.pineapples

d.pears

e.watermelon

f.pawpaw




3. Write the number names.



4. Fill in the missing numbers.



4 andmakes.....



.....and 3 makes

5. Fill in the missing numbers.

1.....3,.....5.....

2,, 4,,

1,,,,, 6.