

Name: _____

Write the ratio in simplest form.

bottles to cans




____ : ____

forks to spoons



____ : ____

apples to pears



____ : ____

golf balls to golf tees



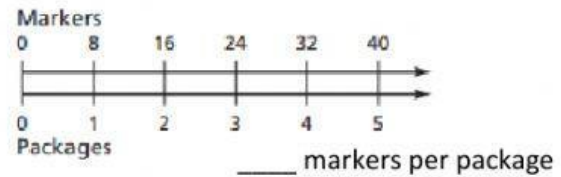
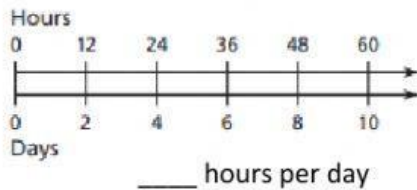
____ : ____

Find the missing values in the ratio table.

Trucks	2		30
Cars	3	9	

Cats	10	5	
Dogs	4		32

Find the unit rate for the situation.



250 words in 5 minutes _____ words per minute

\$1.98 for 6 bananas \$_____ per banana

20 meters in 4 seconds _____ meters per second

400 miles on 20 gallons _____ per gallon

Determine which is the better buy: A or B.

Hand Soap	A	B
Cost (dollars)	1	4
Fluid ounces	8	50

Beef	A	B
Cost (dollars)	7.38	9.57
Pounds	2	3