

# THE RESPIRATORY SYSTEM

1. Watch the video "[The Respiratory System and Respiration](#)" and complete the following activities.

1.1. Answer the questions using the words provided in the box.

oxygen

involuntary

carbon dioxide

a) What gas does human being **take in** when we breathe?

We **inhale** \_\_\_\_\_.

b) What gas does human beings **eliminate** during respiration?

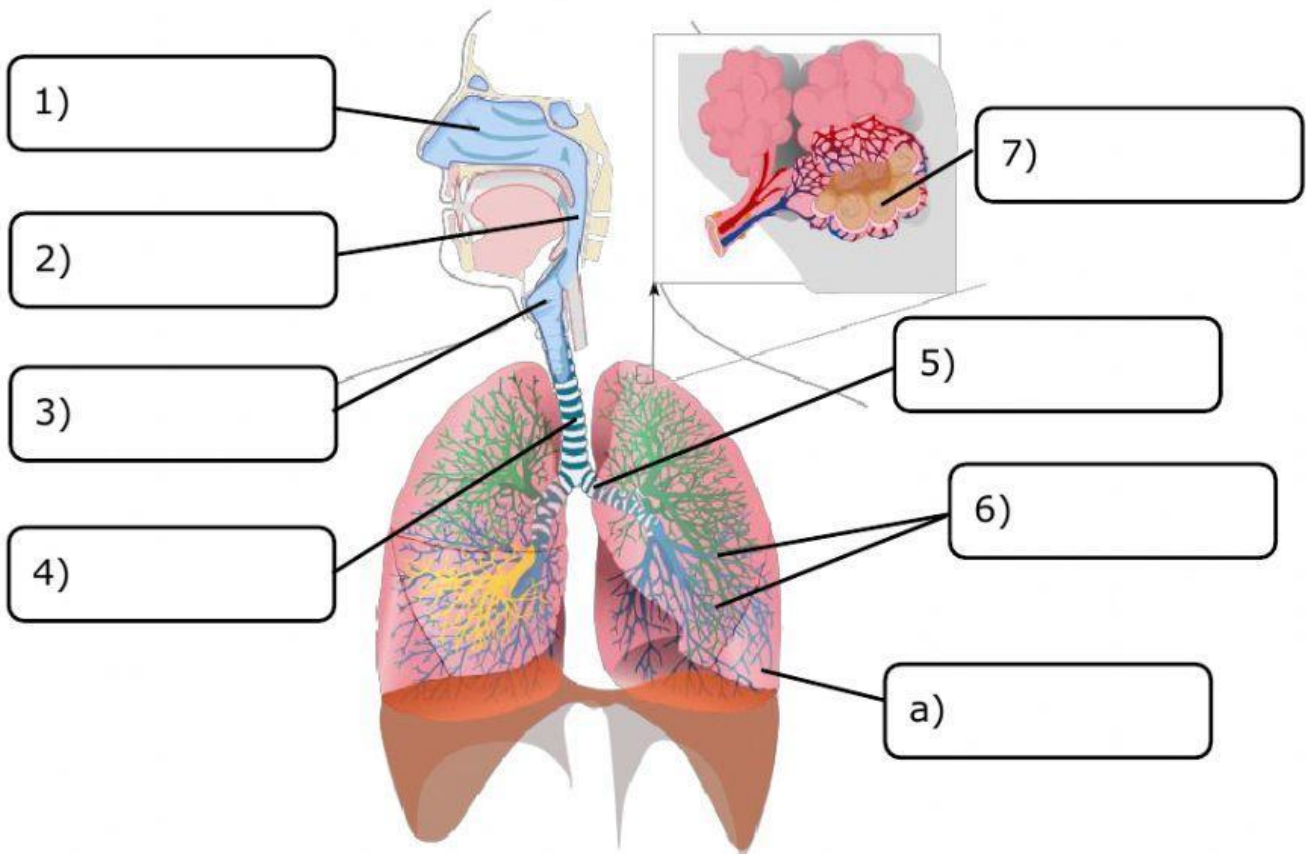
We **exhale** \_\_\_\_\_.

c) Is **respiration** a voluntary or involuntary movement?

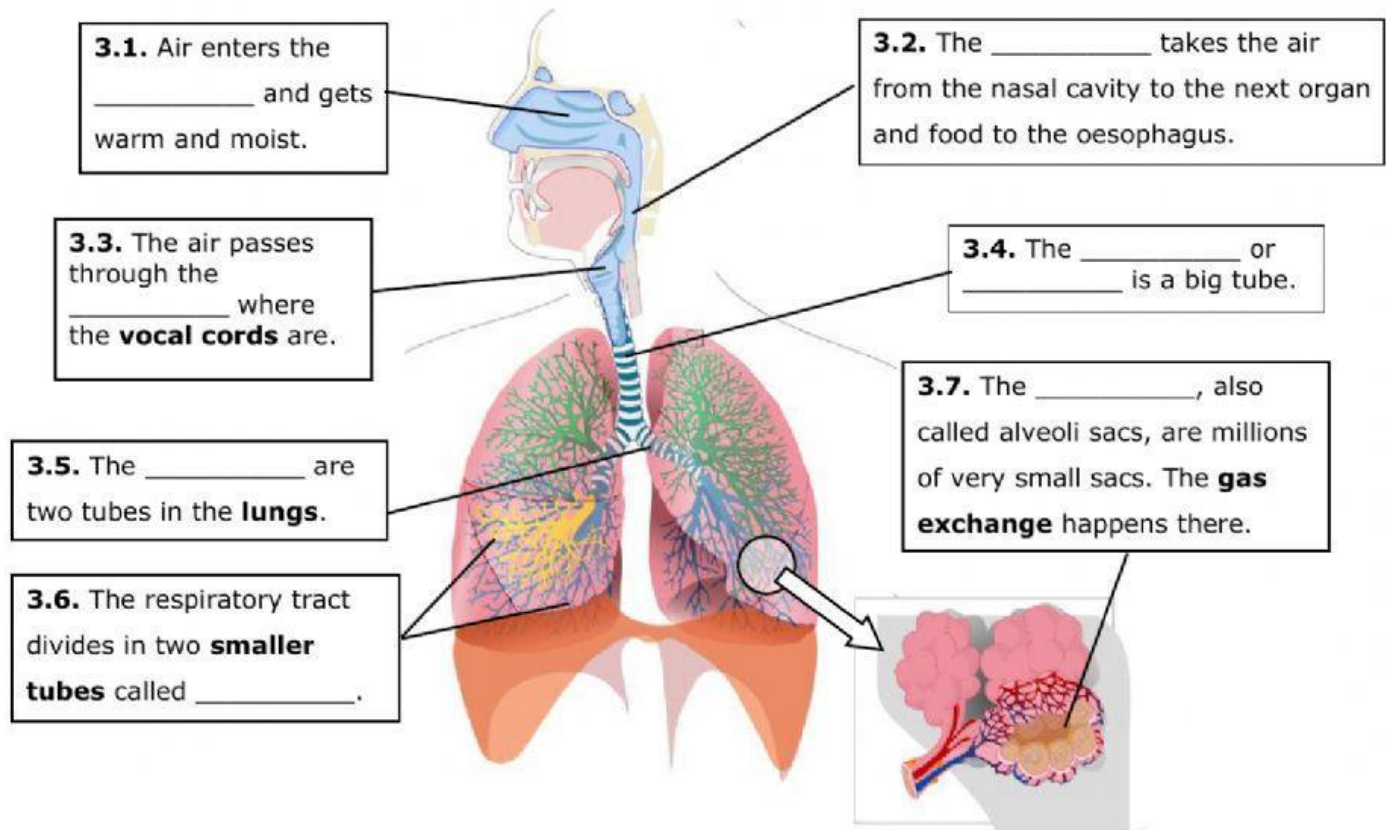
It is an \_\_\_\_\_ movement.

1.2. Name the organs of the respiratory system.

Nose	Bronchioles	Larynx	<b>Trachea</b> or windpipe
Bronchi	Pharynx	Lungs	Alveolar sacs or <b>alveoli</b>



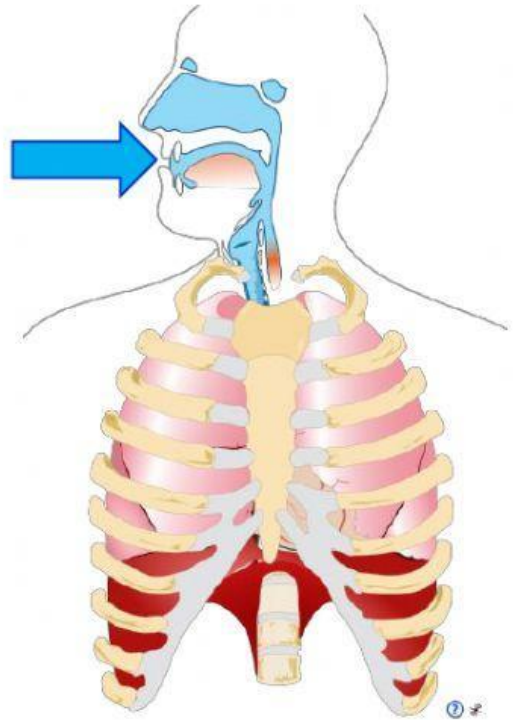
2. Complete the definitions by writing the organs of the respiratory system.



### 3. Choose the correct answer and copy it the box.

#### INHALATION

- We breathe **in/out** (1)\_\_\_\_\_ air.
- Our lungs get **smaller/bigger** (2)\_\_\_\_\_.
- We inhale **oxygen/carbon dioxide** (3)\_\_\_\_\_.
- The air passes to our **lungs/blood** (4)\_\_\_\_\_ and then our **lungs/blood** (5)\_\_\_\_\_.



#### EXHALATION

- We breathe **in/out** (6)\_\_\_\_\_ air.
- Our lungs get **smaller/bigger** (7)\_\_\_\_\_.
- We exhale **oxygen/carbon dioxide** (8)\_\_\_\_\_ because our body doesn't need it.

