





ADUVIE INTERNATIONAL SCHOOL, 08089394474

Mathematics Homework for Year Two


A) Match the following arrays to their corresponding multiplication sentences




$$3 \times 3 = 9$$



$$5 \times 3 = 15$$



$$3 \times 4 = 12$$



$$4 \times 5 = 20$$

B) Solve the following using equal group methods and beg your parent(s) to snap the workings and send to Mr. Lanre's PRIVATE WHATSAPP NUMBER.

- 1) 4 times 7 =
- 2) 3 multiplied by 13=
- 3) $5 \times 6 =$

C) Answer the following questions

Use repeated addition

- 1) $2 \times 6 =$ =
- 2) $4 \times 7 =$ =

3) $7 \times 3 = 21$ can be read as

- a) 7 groups of 21 pieces each equals 3 pieces in all b) 7 groups of 3 pieces each equals 21 pieces in all c) 3 groups of 21 pieces each equals 7 pieces in all

4) 9×3 can be written as

- a) $9 + 9 + 9$ b) $3 + 3 + 3$ c) $9 + 9 + 9 + 9 + 9 + 9 + 9$

5) $6 + 6 + 6 + 6$ can be written as

- a) 6×6 b) $6 + 3$ c) 6×3