





Name: _____



Our Weather and Climate

Name the following weather instruments. Then select what they measure.

1. 	2. 	3. 	4. 

Use the words in the box below to fill in the blanks next to their definitions

meteorologist

climate

sub-tropical

weather

Celsius

5. A scale on a thermometer. _____
6. The type of weather a place has in general. _____
7. A person who studies and reports the weather. _____
8. The climate of The Bahamas. _____
9. The condition of the atmosphere at a certain time and place. _____

Answer the following questions in the spaces provided.

10. Give two places where we can get the weather forecast.

11. Name two months in the year when The Bahamas experiences the most rainfall.

12. Name two months in the year when The Bahamas is at greatest risk of a hurricane.

13. What is the difference between weather and climate?
