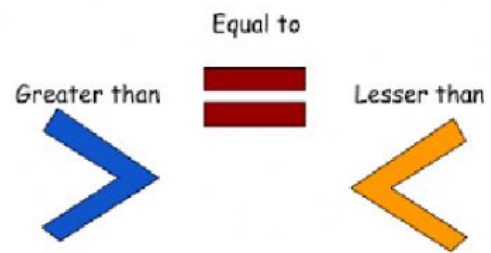
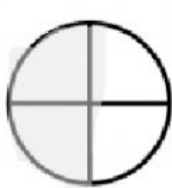


Compare the fractions  
using  $>$ ,  $<$ , or  $=$ .



Hint: Think about which fraction  
covers more space!



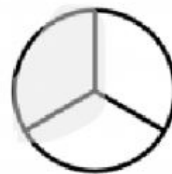
$$\frac{2}{4}$$



$$\frac{3}{4}$$



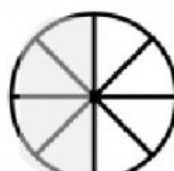
$$\frac{2}{4}$$



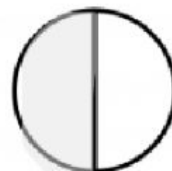
$$\frac{2}{3}$$



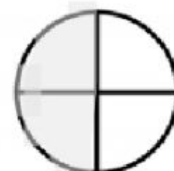
$$\frac{2}{4}$$



$$\frac{4}{8}$$



$$\frac{1}{2}$$



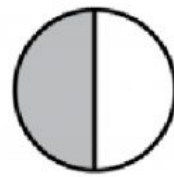
$$\frac{2}{4}$$



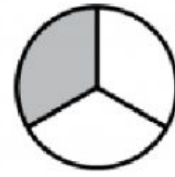
$$\frac{3}{4}$$



$$\frac{4}{5}$$



$$\frac{1}{2}$$



$$\frac{1}{3}$$

