


COMPLETA LA TABLA HASTA LLEGAR A 10. DESPUÉS, COMPLETA LAS SUMAS CON LOS AMIGOS DEL 10.

●	●	●	●	●
●				

$6 + \square = 10$



●	●	●	●	●

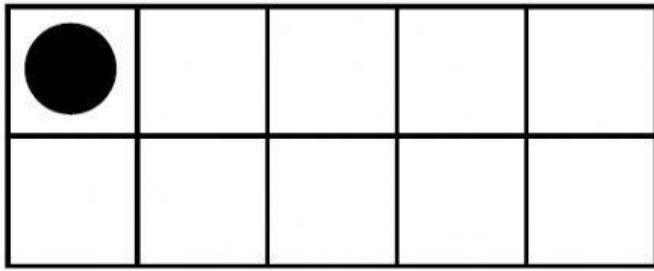
$5 + \square = 10$



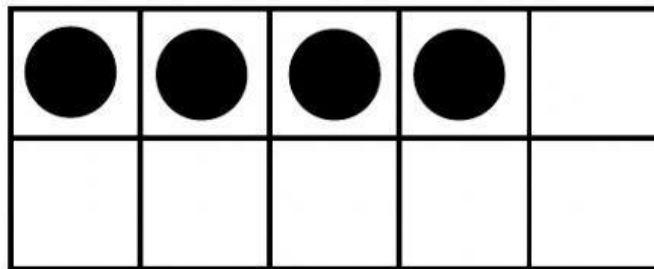

●	●	●	●	●
●	●			

$7 + \square = 10$







$$1 + \square = 10$$



$$4 + \square = 10$$



$$8 + \square = 10$$

