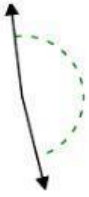


Determina se l'angolo mostrato è acuto, ottuso, retto, o piatto.

**Risposte**

Es)



1)



2)



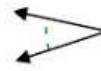
3)



4)



5)



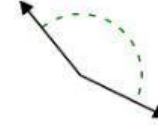
6)




7)



8)



9)



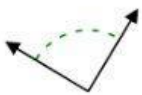
10)



11)



12)



13)



14)



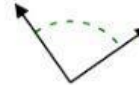
15)



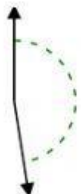
16)



17)



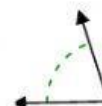
18)



19)



20)

Es. ottuso

1. \_\_\_\_\_

2. \_\_\_\_\_

3. \_\_\_\_\_

4. \_\_\_\_\_

5. \_\_\_\_\_

6. \_\_\_\_\_

7. \_\_\_\_\_

8. \_\_\_\_\_

9. \_\_\_\_\_

10. \_\_\_\_\_

11. \_\_\_\_\_

12. \_\_\_\_\_

13. \_\_\_\_\_

14. \_\_\_\_\_

15. \_\_\_\_\_

16. \_\_\_\_\_

17. \_\_\_\_\_

18. \_\_\_\_\_

19. \_\_\_\_\_

20. \_\_\_\_\_