

BUENOS AYRES GOVERNMENT PRIMARY SCHOOL

STANDARD 3 - ONLINE CLASSES

MATHEMATICS EVALUATION

TERM 1, SEP.- DEC. 2020

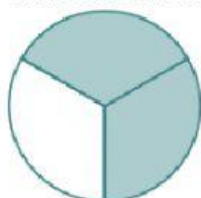
WEEKLY TEST

1. Write the **numeral** for: one thousand, six hundred and twenty-three.

Answer: _____


2. Write in words: 3 145.

3. Write the **fraction** to represent the shaded parts.



Answer: _____

4. Shade **5/8** of the strip below.



5. Study the numbers below. Circle the largest number and underline the smallest number.

546

654

465

6. Subtract **569** from **899**.

Answer: _____

7. Round the number below to the nearest ten.

567

Answer: _____

8. Create the largest four digit number using the digits below.

5364

Answer: _____

9. Complete the statement below.

2m = _____ **cm**

10. Circle the largest unit from those listed below.

m km mm cm

11. Find the sum of **2 342** and **5 245**.

Answer: _____

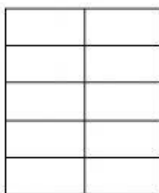
12. Underline the appropriate unit of measurement for the weight of the chicken.



g, mg, kg

13. Find the **AREA and PERIMETER** of the following shape.

2 cm



5 cm

Area = length x Breadth/width

Perimeter = ____ + ____ + ____ + ____

14. Draw hands on the clock to show half past 2 o'clock



15. How many minutes in one hour? _____ minutes