

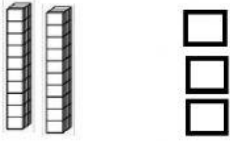
Mathematics

Tens and Ones Twenty Family Numbers



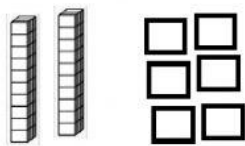
Instructions: Type how many tens and ones.

A.



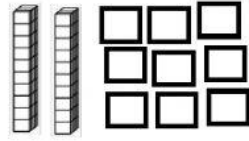
___ tens ___ ones = ___

B.



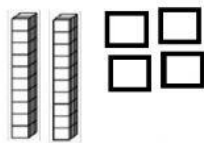
___ tens ___ ones = ___

C.



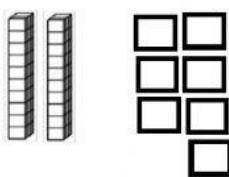
___ tens ___ ones = ___

D.



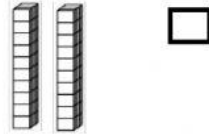
___ tens ___ ones = ___

E.



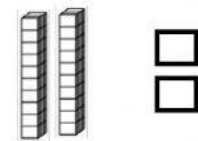
___ tens ___ ones = ___

F.



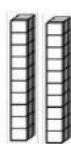
___ tens ___ ones = ___

G.



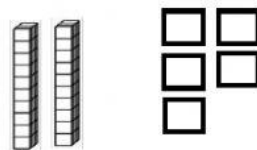
___ tens ___ ones = ___

H.



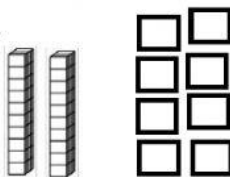
___ tens ___ ones = ___

I.



___ tens ___ ones = ___

J.



___ tens ___ ones = ___