





Πόσο μας κάνουν....

 
 $\boxed{1} + \boxed{3} = \boxed{5} \boxed{4} \boxed{3}$

 
 $\boxed{2} + \boxed{4} = \boxed{6} \boxed{5} \boxed{2}$

 
 $\boxed{2} + \boxed{2} = \boxed{4} \boxed{6} \boxed{9}$

 
 $\boxed{5} + \boxed{1} = \boxed{3} \boxed{6} \boxed{8}$

 
 $\boxed{3} + \boxed{2} = \boxed{1} \boxed{9} \boxed{5}$