


Name :


1. Look at each shape carefully, calculate the perimeter.

a)



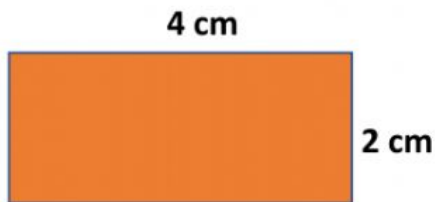
Perimeter = cm

b)

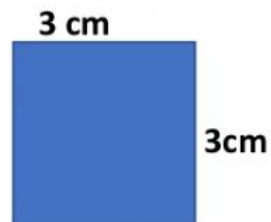


Perimeter = cm

2. Calculate the perimeter of the shapes below.



Perimeter = cm



Perimeter = cm

3. Ali has a rectangular garden in front of his house. He wanted to fence his garden which measures 8m by 6m. How much fence does he need for it?