

Aflarea termenului necunoscut la adunare

1. Află termenul necunoscut.

$13 + a = 76$

$a = \underline{\hspace{2cm}}$

$a = \underline{\hspace{1cm}}$

$V: \underline{\hspace{2cm}}$

$a + 34 = 65$

$a = \underline{\hspace{2cm}}$

$a = \underline{\hspace{1cm}}$

$V: \underline{\hspace{2cm}}$

$7 + a = 78$

$a = \underline{\hspace{2cm}}$

$a = \underline{\hspace{1cm}}$

$V: \underline{\hspace{2cm}}$

$a + 14 = 57$

$a = \underline{\hspace{2cm}}$

$a = \underline{\hspace{1cm}}$

$V: \underline{\hspace{2cm}}$

$52 + a = 84$

$a = \underline{\hspace{2cm}}$

$a = \underline{\hspace{1cm}}$

$a + 31 = 74$

$a = \underline{\hspace{2cm}}$

$a = \underline{\hspace{1cm}}$

$45 + a = 79$

$a = \underline{\hspace{2cm}}$

$a = \underline{\hspace{1cm}}$

$a + 13 = 37$

$a = \underline{\hspace{2cm}}$

$a = \underline{\hspace{1cm}}$

$36 + a = 77$

$a = \underline{\hspace{2cm}}$

$a = \underline{\hspace{1cm}}$

$33 + a = 85$

$a = \underline{\hspace{2cm}}$

$a = \underline{\hspace{1cm}}$

$65 + a = 87$

$a = \underline{\hspace{2cm}}$

$a = \underline{\hspace{1cm}}$

$a + 22 = 46$

$a = \underline{\hspace{2cm}}$

$a = \underline{\hspace{1cm}}$

$34 + a = 56$

$a = \underline{\hspace{2cm}}$

$a = \underline{\hspace{1cm}}$

$a + 39 = 89$

$a = \underline{\hspace{2cm}}$

$a = \underline{\hspace{1cm}}$

$47 + a = 68$

$a = \underline{\hspace{2cm}}$

$a = \underline{\hspace{1cm}}$

$a + 40 = 92$

$a = \underline{\hspace{2cm}}$

$a = \underline{\hspace{1cm}}$

$64 + a = 84$

$a = \underline{\hspace{2cm}}$

$a = \underline{\hspace{1cm}}$

$a + 56 = 79$

$a = \underline{\hspace{2cm}}$

$a = \underline{\hspace{1cm}}$

$75 + a = 96$

$a = \underline{\hspace{2cm}}$

$a = \underline{\hspace{1cm}}$

$a + 64 = 88$

$a = \underline{\hspace{2cm}}$

$a = \underline{\hspace{1cm}}$

2. Bunicul are în livadă 28 de pomi: 11 peri, 13 pruni iar restul sunt meri.

Câți meri sunt în livadă?

Rezolvare

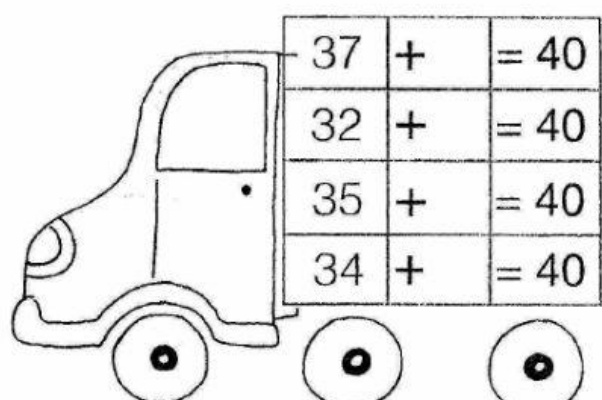
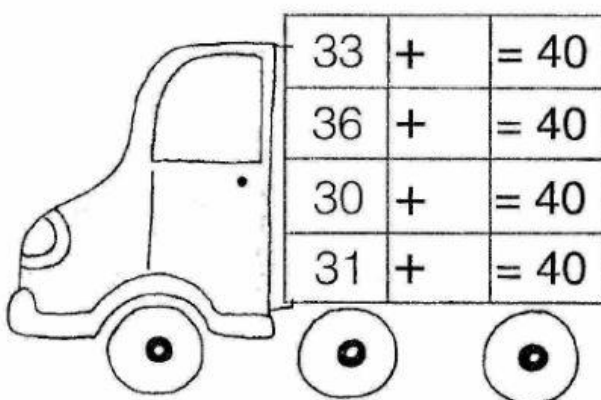
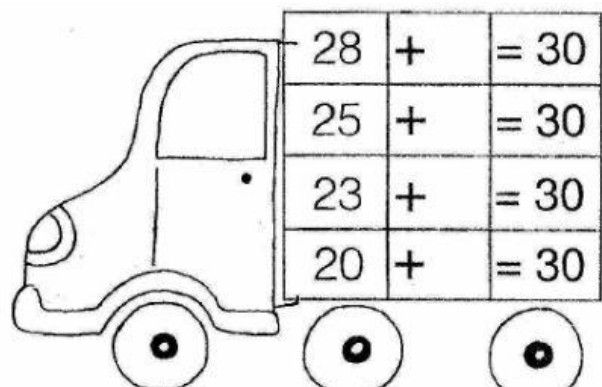
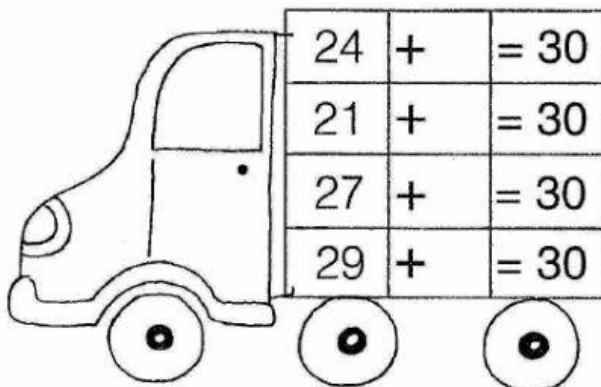
1. Câți peri și pruni sunt? _____

2. Câți meri sunt în livadă? _____

R: _____



3. Completează termenul necunoscut.



4. Piramide matematice

