


PERIMETER CLASSWORK 1/7/2020

Let's practice finding perimeter of the polygons. Complete each problem below.

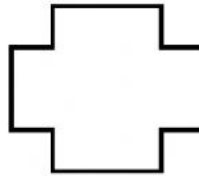
Please make sure you are showing all your work for each problem!


- 1 Next to each shape, write "polygon" or "not a polygon".

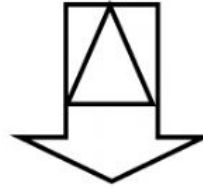














- 2 . Ye Olde Cake Shoppe uses two different boxes for packaging cookies. The outline of the bottom of each box is shown.



Cookie Box 1

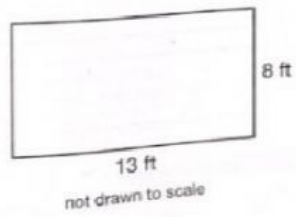


Cookie Box 2

Which box has the greater perimeter?

Answer: _____

3. Mr. Trevino draws this diagram of his garden.



How many feet of fencing does Mr. Trevino need to fence his garden?

Answer: _____

4. What is the perimeter of the figure outlined on this grid?



Answer: _____

5

9 feet



6 feet

What is the perimeter of the rectangle?

Answer: _____