

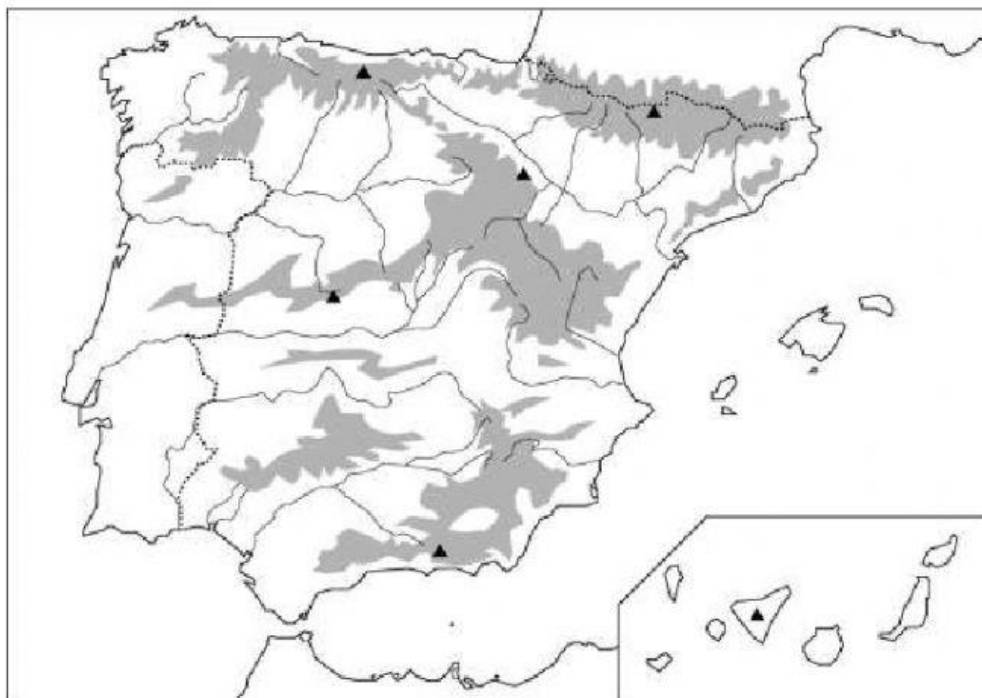
1. Write True (T) or False (F).

- On a physical map, green areas represent **coastal areas** and **river valleys**. ☐
- On a physical map, yellow areas represent **mountains**. ☐
- On a physical map, brown areas represent **plains**. ☐

1. 2. Choose the most appropriate answer and locate the natural borders on a map.

- a) The natural borders of Spain are Pyrenees, the Cantabrian Sea, the Mediterranean Sea and the Atlantic Ocean.
- b) The natural borders of Spain are Sistema Ibérico, the Cantabrian Sea, the Mediterranean Sea and the Atlantic Ocean.

The answer is _____.



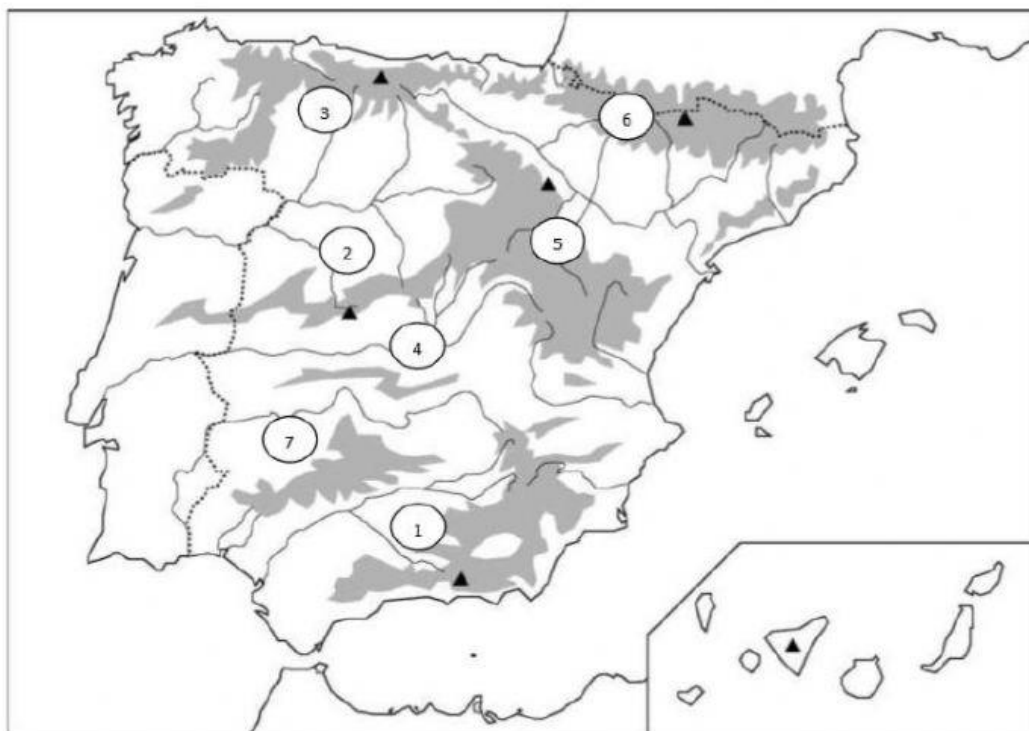
3. Write True or False and correct the mistakes.

A **mountain range** is a group of mountain chains. _____

A **river** is a long, flowing body of water that is always moving. _____

A **mountain** is a high area of land with a flat top. _____

4. Look at the map and match each number with its name.



COORDILLERA CANTÁBRICA _____

PYRENEES _____

SISTEMA CENTRAL _____

MONTES DE TOLEDO _____

SISTEMAS BÉTICOS _____

SISTEMA IBÉRICO _____

SIERRA MORENA _____

5. Classify these mountain ranges and mountain chains.

Sistema Central, Pyrenees, Sierra Morena, Montes de Toledo,
Sistema Ibérico, Cordillera Cantábrica, Sistemas Béticos

DIVIDING THE MESETA	SURROUNDING THE MESETA	OUTSIDE THE MESETA

7. Answer these questions.

a) What is the highest peak of Spain? _____

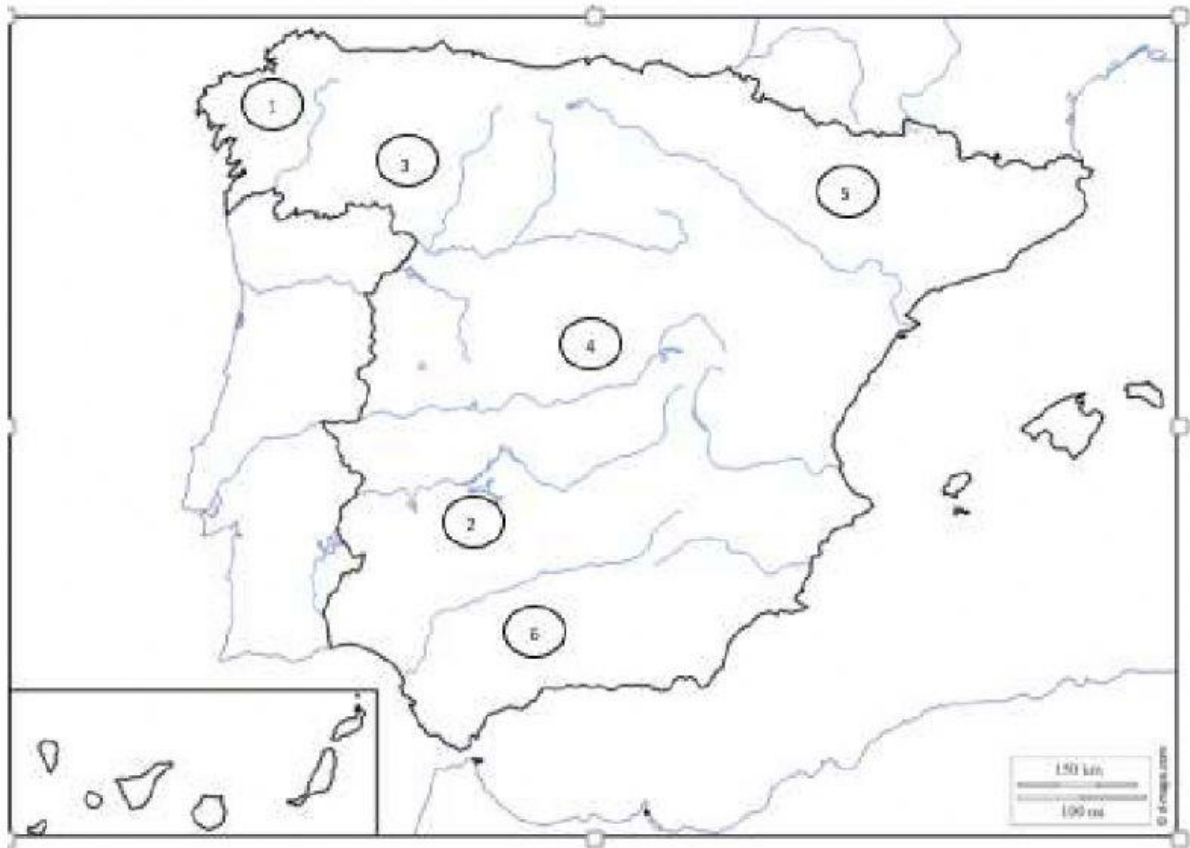
b) What is the highest peak of the Iberian Peninsula? _____

c) What is the longest river of Spain? _____

d) What is the largest river of Spain? _____

d) Write the territories of Spain: _____

8. Write the name of each river.



1 _____

2 _____

3 _____

4 _____

5 _____

6 _____