
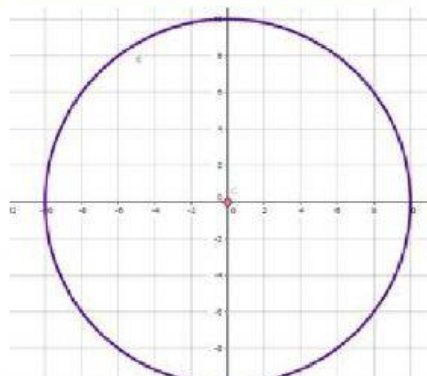

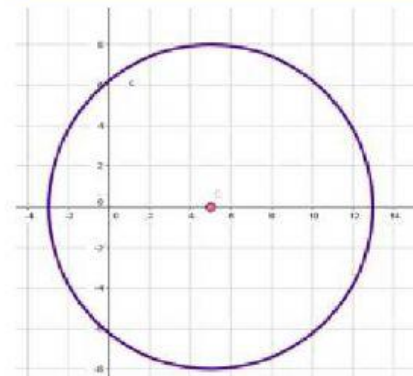
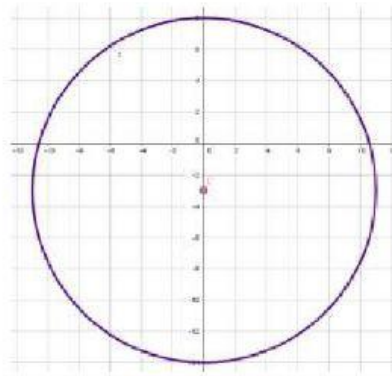
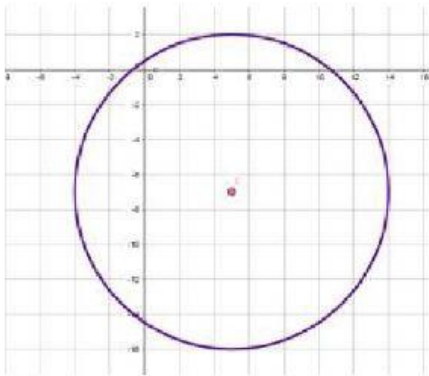


# Grafica de una circunferencia

Arrastra cada ecuación canónica de la circunferencia con su grafica correspondiente.



$$x^2 + (y - 5)^2 = 64$$

$$(x - 3)^2 + y^2 = 121$$

$$x^2 + y^2 = 100$$

$$(x - 5)^2 + y^2 = 64$$

$$(x + 5)^2 + (y - 7)^2 = 81$$

$$x^2 + (y + 3)^2 = 121$$

$$(x - 5)^2 + (y + 7)^2 = 81$$

$$(x - 1)^2 + (y - 1)^2 = 100$$