

Mathematics
Tens and Ones Teen Family Numbers



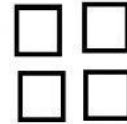
Instructions: Type how many tens and ones.

a.




_____tens _____ones = _____

b.



_____tens _____ones = _____

c.



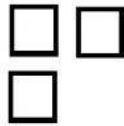
_____tens _____ones = _____

d.



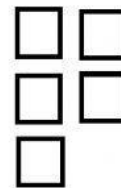
_____tens _____ones = _____

e.




_____tens _____ones = _____

f.



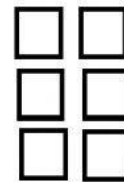
_____tens _____ones = _____

g.



_____tens _____ones = _____

h.



_____tens _____ones = _____

Mathematics

Teen Family Numbers



I. Type the teen family numbers.

J. Type the numbers in the correct order from least (smallest) to greatest (biggest).

19 17 15 18 14 11 13 16 12 10

--	--	--	--	--	--	--	--	--	--

K. Type the missing number.

- l. _____, 11 m. _____, 19 n. _____16 o. _____12
 p. 17, _____ q. 11, _____ r. 15_____ s. 13, _____
 t. 10, _____12 u.14, _____, 16 v. 17, _____, 19

W. Type how many tens and ones in each number.

- x. 15= _____tens and _____ ones y.10=_____tens and _____ ones
 z.19=_____tens and _____ ones a. 14=_____tens and _____ ones
 b. 16=_____tens and _____ ones c. 11=_____tens and _____ ones

D. Type the missing numbers.

e. _____, 11, _____, 13, _____,

f. 13, _____, _____,16

g. 12,_____, _____, _____, _____, 17

h. _____, 11, _____, _____, _____, _____, _____, 18