



Name:.....


Date:.....

On My Own

Write how many hundreds, tens, and ones.

5.  _____ hundreds = _____ tens = _____ ones

6.  _____ hundreds = _____ tens = _____ ones

7.  _____ hundreds = _____ tens = _____ ones

Write how many tens and hundreds.

8. 800 ones = _____ tens = _____ hundreds

9. 700 ones = _____ tens = _____ hundreds

