









Mathematics (5 & 6 years)

Count the addition of the transportation. Then, drag and drop the answer in the box.

 $+$  $=$ 

 $+$  $=$ 

 $+$  $=$ 

 $+$  $=$ 

8

4

10

7