







Exercise 1.3



- 1 The angles below 90° and above 0° are called as _____.
- 2 The angles below 180° and above 90° are called as _____.
- 3 _____ angle is formed by joining two consecutive right angles.
- 4 The obtuse angle in $\triangle ABC$ is _____.



 - a. $\angle A$
 - b. $\angle B$
 - c. $\angle C$
 - d. None of these
- 5 Hand of a clock at 3.20 shows _____ angle.
- 6 Which of the following alphabets has a right angle in it?
 - a. L
 - b. K
 - c. Z
 - d. N
- 7 Circle the right angle.
 - a. 
 - b. 
 - c. 
 - d. 
- 8 The angle shown in this picture is.



- a. more than 120°
 - b. Less than 45°
 - c. more than 180°
 - d. 90°
- 9 The angle formed by the nail cutter is _____.
- 10 Name the angles formed when the vessels are lifted by tongs in kitchen is _____.