



# FRAZIONI

Scrivi sotto ogni frazione la lettera della figura corrispondente:

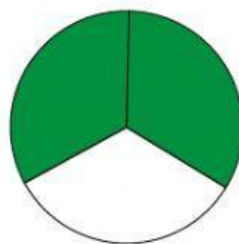
HA LE GAMBE,  
MA NON CAMMINA,  
QUANDO LAVORA  
FA RIPOSARE,  
CHE COS'È?



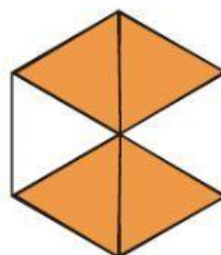
D



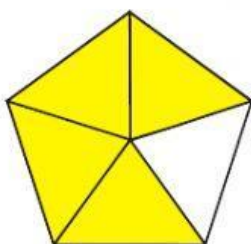
A



I



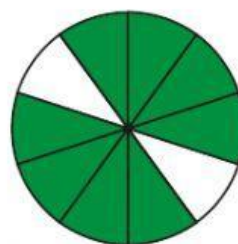
S



A



L



E

$$\frac{1}{2}$$

$$\frac{3}{4}$$

$$\frac{4}{6}$$

$$\frac{8}{10}$$

$$\frac{3}{8}$$

$$\frac{2}{3}$$

$$\frac{4}{5}$$



è .....