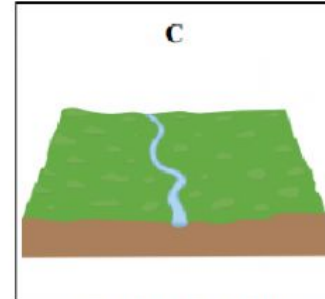
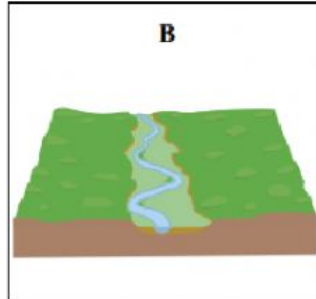
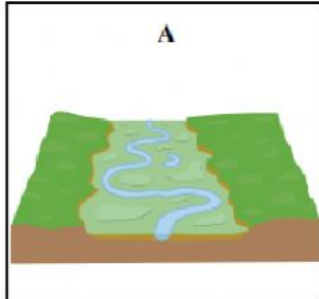


1. RIVERS

Name the correct river courses labelled **A**, **B** and **C**.



Amended from www.geocaching.com

A _____

B _____

C _____

2. VOLCANOES

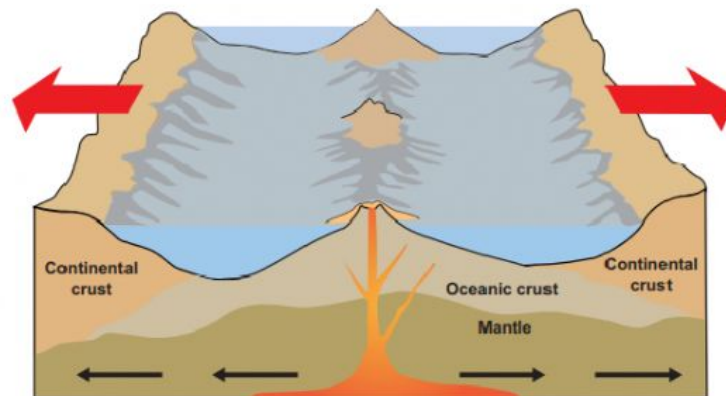
In the boxes provided, match each of the letters in **Column X** with the number of its pair in **Column Y**. One match has been completed for you.

Column X	
A	Dormant
B	Vent
C	Extinct
D	Lava

Column Y	
1	A volcano that has not erupted in historic times.
2	Molten rock released during a volcanic eruption.
3	An opening in the earth's crust through which volcanic material travels up and
4	A volcano that has not erupted in a long time, but may do so again.

X	Y
A	
B	
C	
D	2

3. THE EARTH'S CRUST



Which one of the following lists are all terms used to describe the plate boundary in the above diagram?

Divergent plates, Pacific Ring of Fire, coral reef.

☐

Colliding plates, Mid-Atlantic Ridge, volcanic islands.

☐

Separating plates, Mid-Atlantic Ridge, volcanic mountains.

☐

Tick (✓) the correct box.

MASS MOVEMENT

Circle the correct option in each of the following statements.

(i) Human activity is not a cause of mass movement.

True / False

(ii) An avalanche is a slow form of mass movement.

True / False

(iii) Trees which tilt downwards on a hillside are evidence of soil creep.

True / False

8A. COASTS

In the boxes provided, match each of the letters in **Column X** with the number of its pair in **Column Y**. One match has been completed for you.

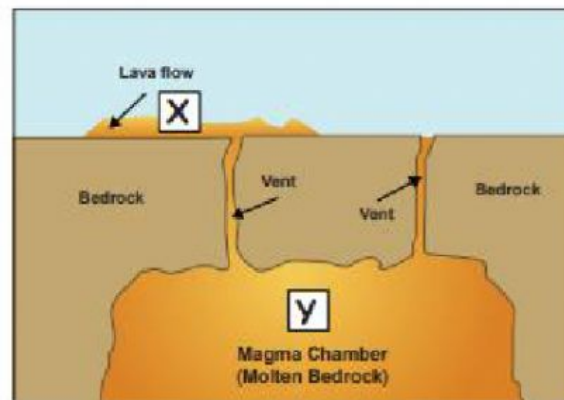
Column X		Column Y		X	Y
A	Blowhole	1	A man-made coastal defence feature.	A	
B	Sand Bar	2	A feature of coastal erosion formed by air pressure.	B	
C	Sea Cliff	3	A feature of coastal erosion formed by notches being undercut.	C	
D	Gabion	4	A feature of coastal deposition.	D	1



Complete each of the following sentences.

- (i) The weather instrument shown in the photograph measures sunshine and is called a _____.
- (ii) Sunshine is measured in units called _____.
- (iii) Lines on a map joining places of equal sunshine are called _____.

B. Rocks



Amended from www.wikipedia.org

- (i) Name the igneous rock which forms at X.
- (ii) Describe and explain how the rock at Y is formed.
- (iii) Describe **two** ways in which rocks may be of economic use to people.

(10)

i) .

ii) .

iii) .

Irrigation

- (i) What is meant by the term *irrigation*?
- (ii) Name **one** irrigation scheme you have studied.
- (iii) Explain **one** advantage of this scheme.
- (iv) Explain **one** disadvantage of this scheme.

(10)

i) .

ii) .

iii) .

iv) .