

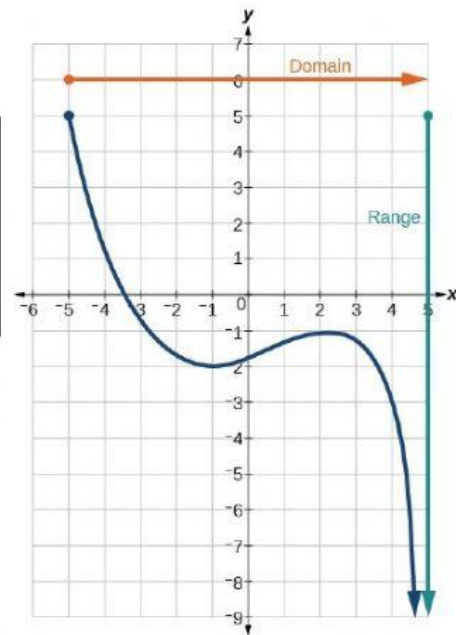
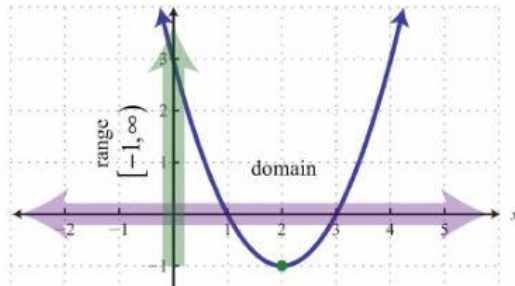
Domain and Range

DOMAIN:

Goes with the _____ variable
represented on the _____ - axis

RANGE:

Goes with the _____ variable
represented on the _____ - axis



CONTINUOUS GRAPH:

Represented by interval notation

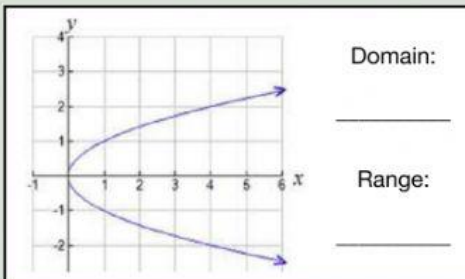
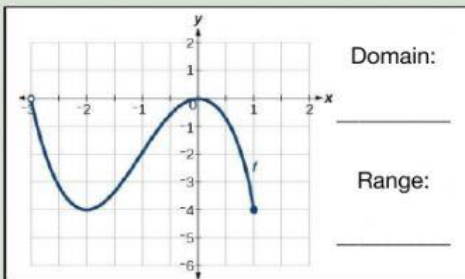
INTERVAL NOTATION:

∞ : graph goes on forever in the positive direction

$-\infty$: graph goes on forever in the negative direction

$(\infty, -\infty)$: goes on forever in the both directions

EXAMPLES:



DISCRETE GRAPH:

Represented by a set of individual values

EXAMPLES:

