


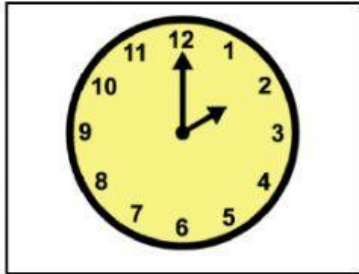


Student Name: \_\_\_\_\_ Date: \_\_\_\_\_

1. What tells us the days and months of a year?



2. Which clock shows 2 o'clock?



3. What clock shows the time ten thirty?



4. Where is the analog clock?

