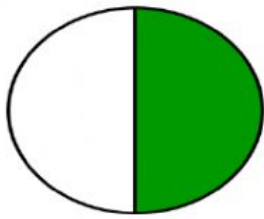



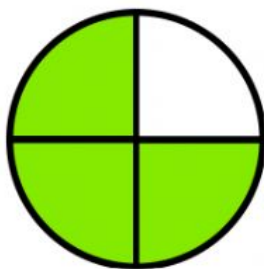
Write the fraction represented by the shaded parts in each of the following figures.



.....



.....



.....



.....

Three-fourths Half One- third One - fourth