






$$\dots - \dots = \dots$$




$$\dots - \dots = \dots$$



$$\dots - \dots = \dots$$



$$\dots - \dots = \dots$$



$$\dots - \dots = \dots$$

$$5 - 3 = \dots$$

$$10 - 3 = \dots$$

$$2 + 3 = \dots$$

$$7 + 3 = \dots$$

$$8 - 3 = \dots$$

$$5 + 3 = \dots$$